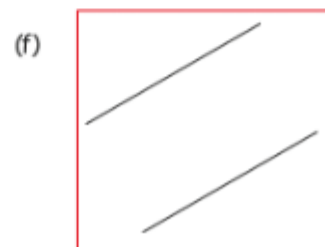
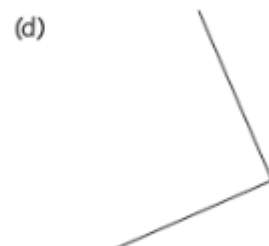
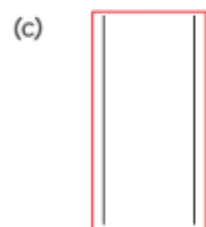


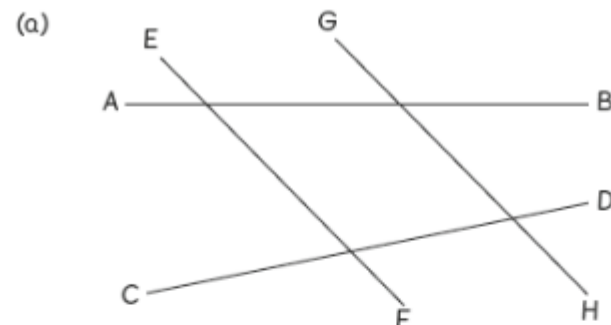
Worksheet 2

Identifying Parallel Lines

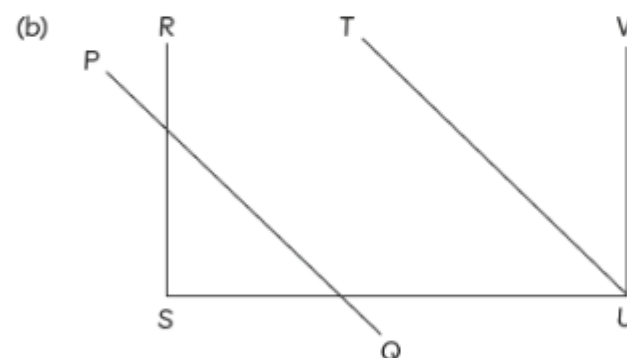
1 Circle the pairs of lines that are parallel.



2 Name the pairs of lines that are parallel.



EF is parallel to **GH**.



PQ is parallel to **TU**.

RS is parallel to **VU**.

3 Name the sides that are parallel in each shape.

(a)



AB

is parallel to

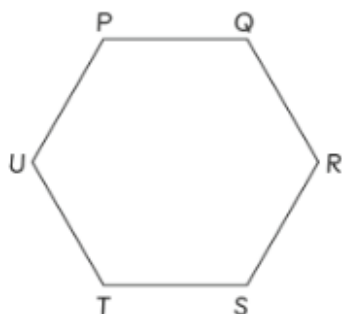
DC

AD

is parallel to

BC

(b)



PQ

is parallel to

TS

UT

is parallel to

QR

PU

is parallel to

RS



4 Look at the letters below.

EXAMINATION

(a) Complete the table.

description	letters
No parallel lines	X, A, M, T, O
1 pair of parallel lines	I, N
More than 1 pair of parallel lines	E

(b) Provide another letter not shown above that has parallel lines.

answer may vary