

Worksheet 14

Measuring Time in Minutes

How many minutes have gone by? Fill in the blanks.

(a)



20 min



(b)



10 min



(c)



45 min



(d)



55 min



(e)

05:26



38 min

06:04

Worksheet 15

Measuring Time in Minutes

Complete the clocks and fill in the blanks.

(a)



10 min



3:00

(b)



50 min



7:10

(c)



40 min



10:10

(d)

11:51

25 min











12:16

12:16

Worksheet 16

Measuring Time in Minutes

Find the start time for each person's activity below and write it in the table.

name	activity	start time	end time
Sam 	Sam took 20 minutes to write an email.	5:14	
Lulu 	Lulu took 15 minutes to make a sandwich.	9:55	
Ravi 	Ravi spent 50 minutes drawing a picture.	10:25	
Holly 	Holly finished reading a book in 45 minutes.	9:00	
Emma 	Emma talked over the phone for 23 minutes.	4:21	04:44
Ruby 	Ruby jogged for 36 minutes.	6:26	07:02