


Measuring Time in Hours

Lesson
11

In Focus

A man started his car journey at  in the morning.

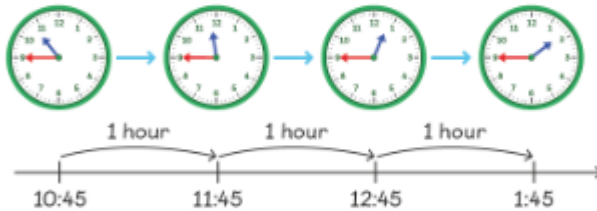
He ended the journey at  in the afternoon.

How long was his journey?



Let's Learn

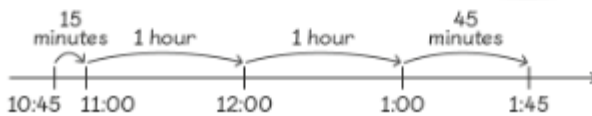
- 1 Lulu did the following.



The journey was 3 hours.

We write min
for minutes.

- 2 Ravi did the following.



The journey was 3 hours.

15 min and 45 min is equal to 1 hour.



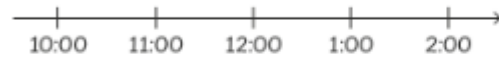
Guided Practice

The following activities started in the morning and ended in the afternoon.
How long was each activity?

Suggest what each activity could be.



(a)



hours

(b)



hours

(c)



hours

What if this last activity ended at 2:00?



Measuring Time in Hours

Lesson 12

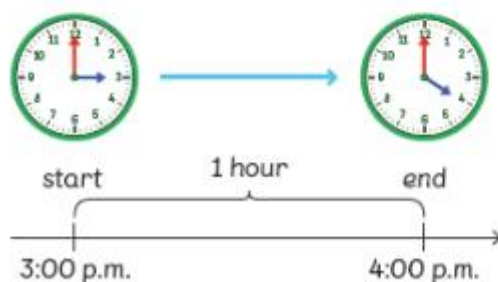
In Focus



The art class started at 3:00 p.m.
It ended 1 hour later.
At what time did the art class end?

Let's Learn

- 1 What is 1 hour after 3:00 p.m.?



4:00 p.m. is 1 hour after 3:00 p.m.
The art class ended at 4:00 p.m.



We write h
for hour.

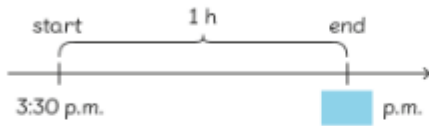


We can use a
timeline to show the
amount of time.

- 2 If the class started at 3:30 p.m. and ended 1 hour later, what time did it end?



Use a timeline.



The art class ended at p.m.



- 3 If the class started at 2:15 p.m. and ended 2 hours later, what time did it end?



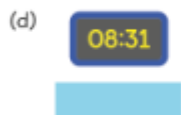
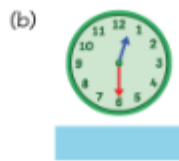
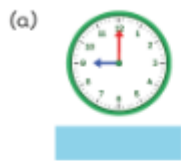
The art class ended at .

Is the end time
in a.m. or p.m.?

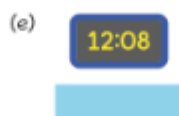
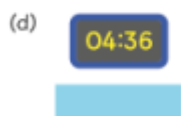
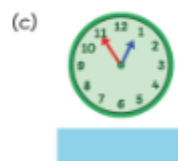


Guided Practice

1 What is the time 1 hour later?



2 What is the time 5 hours later?



Measuring Time in Hours

Lesson 13

In Focus



We have been here for 5 hours!

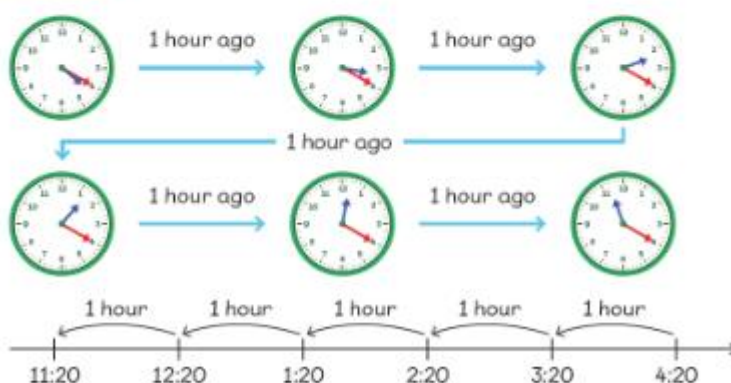
Emma

At what time did Emma arrive?



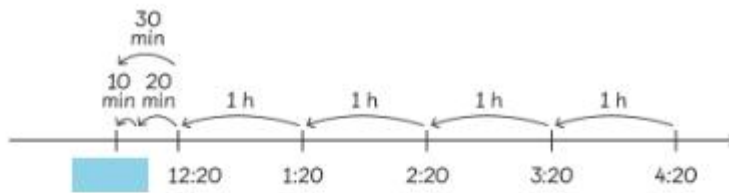
Let's Learn

1



Emma arrived at 11:20 in the morning.

- 2 What if Emma had been there for 4 hours and 30 minutes?



Then, Emma would have arrived at in the morning.

Guided Practice

At what time did each of them arrive?

(a)

I have been here for an hour.



(b)

I have been here for 3 hours.



(c)

I have been here for 4 hours.



