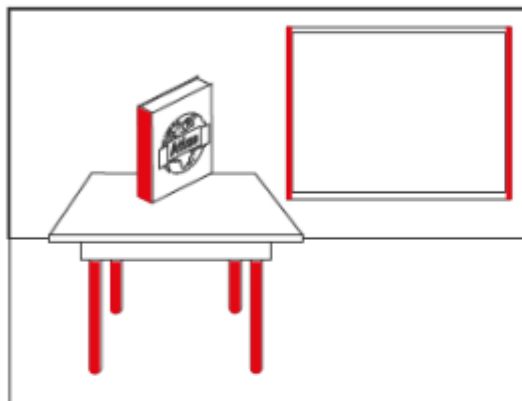


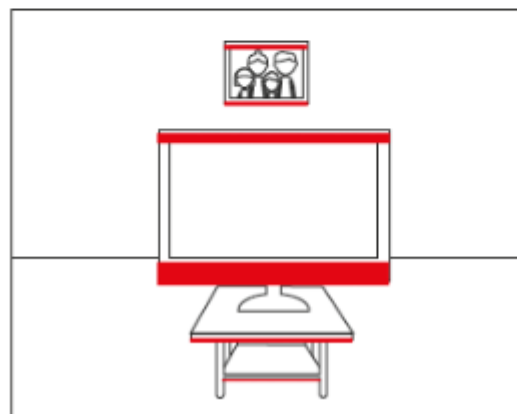
Worksheet 3

Finding Vertical and Horizontal Lines

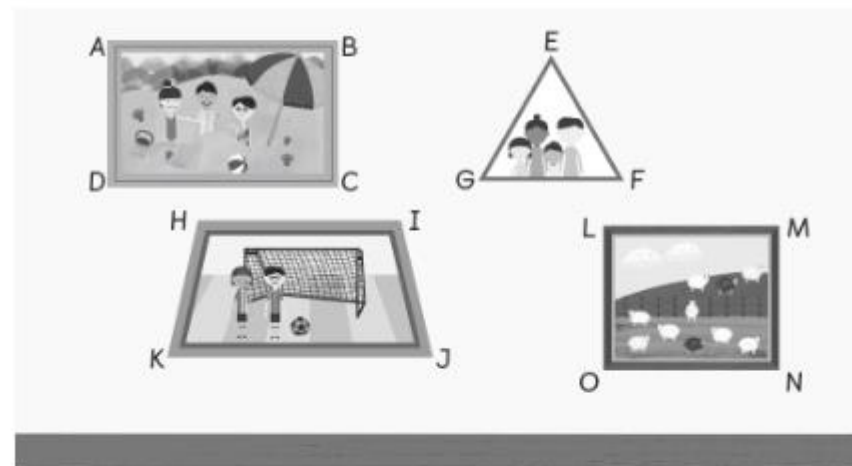
- 1 Colour the vertical lines in the picture below.



- 2 Colour the horizontal lines in the picture below.



- 3 Below are some paintings that hang on the wall of a room.



- (a) List all the horizontal lines.

AB, DC, GF, HI, KJ, LM, ON

- (b) List all the vertical lines.

AD, BC, LO, MN

- (c) Which horizontal lines have the same length?

AB = DC LM = ON

- (d) Which vertical lines have the same length?

AD = BC LO = MN